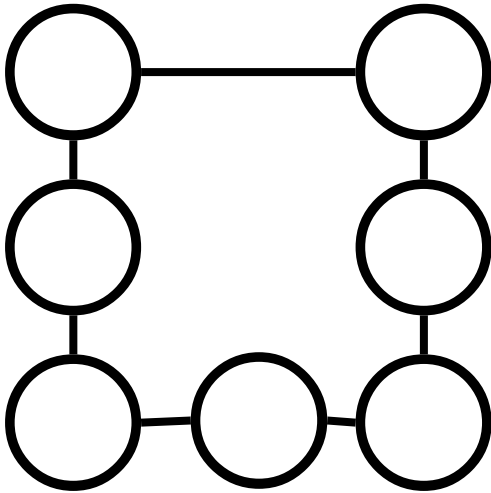


Power Lines

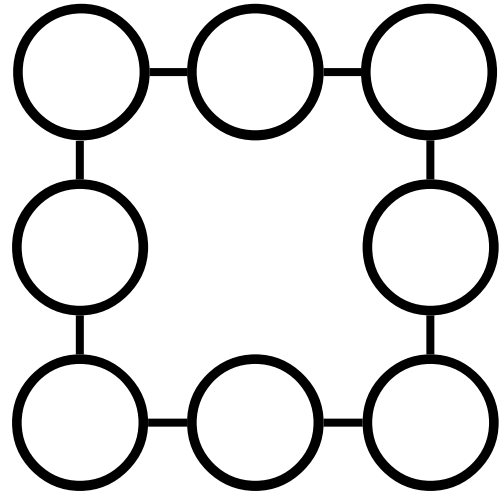
Phase 2 – Part 1

Place each number in a circle so that all the numbers in the same straight line add up to the power line total.



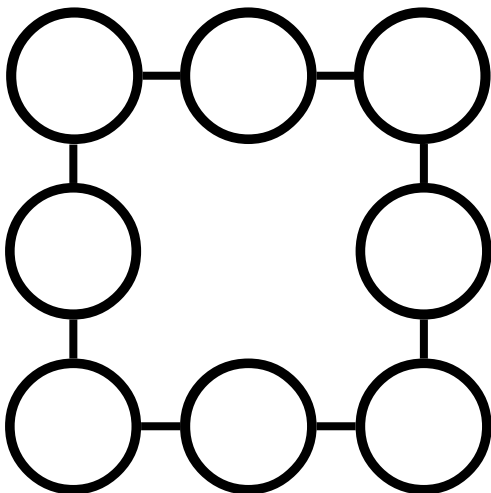
Use 1, 2, 3, 4, 5, 6 and 7

Power Line Total = 12



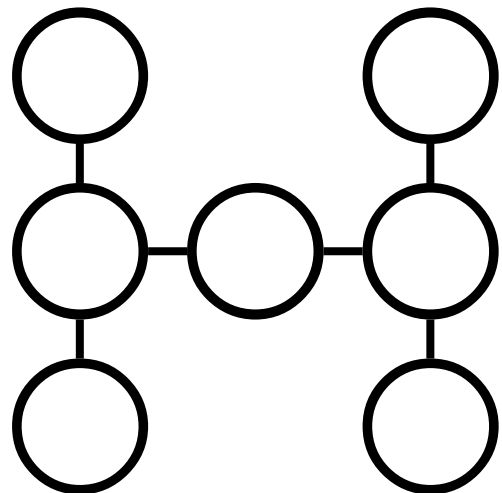
Use 1, 2, 3, 4, 5, 6, 7 and 8

Power Line Total = 15



Use 1, 2, 3, 4, 5, 6, 7 and 8

Power Line Total = 13



Use 2, 3, 4, 5, 6, 7 and 8

Power Line Total = 15